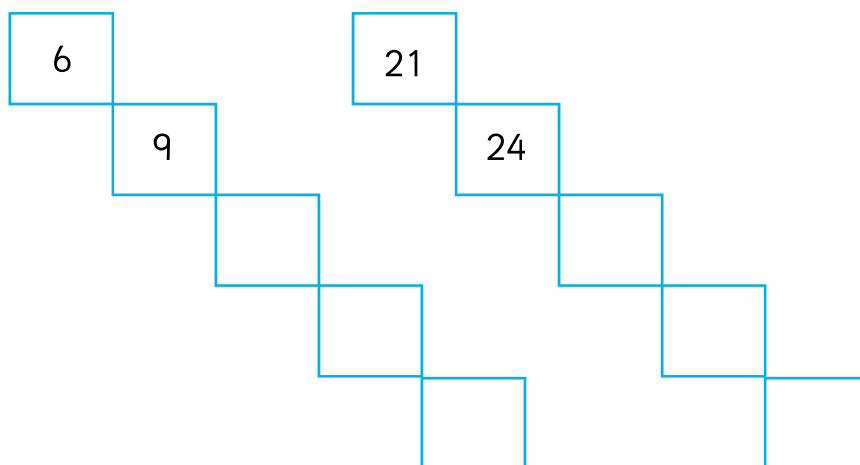




Complete the number sequence.

Colour to show your multiples of 3 to help you.

1	2	3	4	5	6	7	8	9	10
11	12	13	14	15	16	17	18	19	20
21	22	23	24	25	26	27	28	29	30
31	32	33	34	35	36	37	38	39	40
41	42	43	44	45	46	47	48	49	50
51	52	53	54	55	56	57	58	59	60
61	62	63	64	65	66	67	68	69	70
71	72	73	74	75	76	77	78	79	80
81	82	83	84	85	86	87	88	89	90
91	92	93	94	95	96	97	98	99	100



Leanna has 6 football cards.

She collects 3 more every day.

Complete the number track to show how many she will have in 6 days.



6						
---	--	--	--	--	--	--

Tia has 15 football cards.

She collects 3 more every day.

Complete the number track to show how many she will have in 4 days.



15				
----	--	--	--	--

Rosie has 0 football cards.

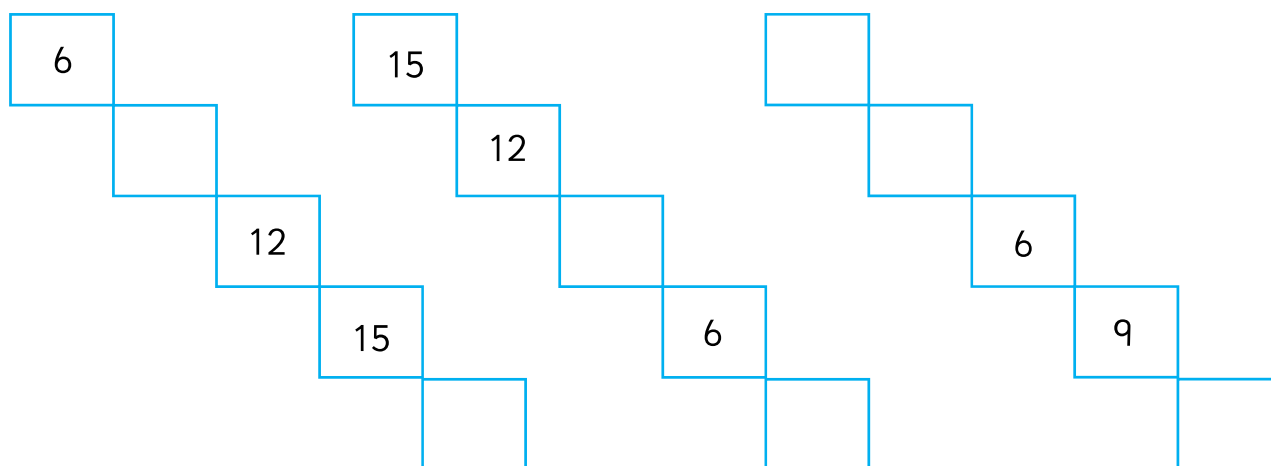
She collects 3 every day.

Complete the number track to show how many she will have in 5 days.



0					
---	--	--	--	--	--


Complete the number sequence.



Leanna has 6 football cards.

She collects 3 more every day.


Complete the number track to show how many she will have in 6 days.



Tia has 15 football cards.

She collects 3 more every day.

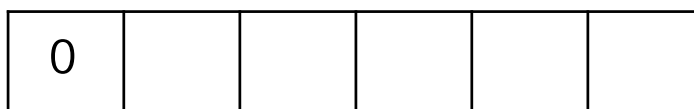
Complete the number track to show how many she will have in 4 days.



Rosie has 0 football cards.

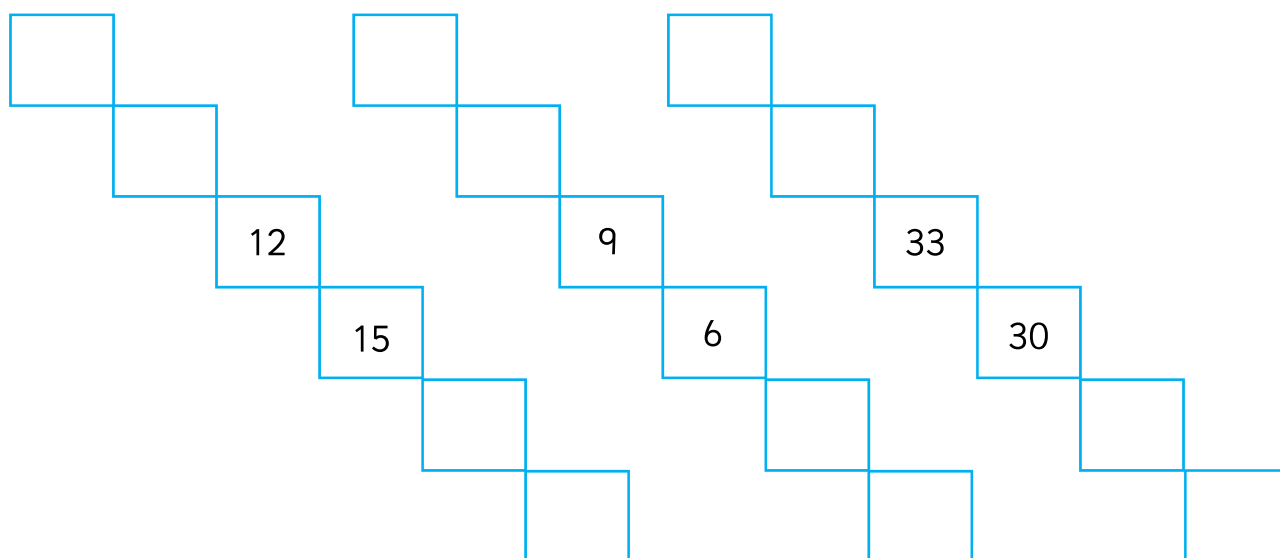
She collects 3 every day.

Complete the number track to show how many she will have in 5 days.





Complete the number sequence.



Leanna has 9 football cards.

She collects 3 more every day.

Draw your own number track to show how many she will have in 4 days.



Tia has 21 football cards.

She collects 3 more every day.

Complete the number track to show how many she will have in 5 days.



Rosie has 21 football cards.

She gives her little brother 3 everyday.

Complete the number track to show how many she will have in 5 days.

